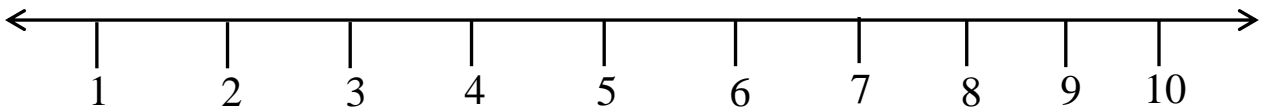


BASIC 1
NUMERACY
SECTION A
Answer the following.

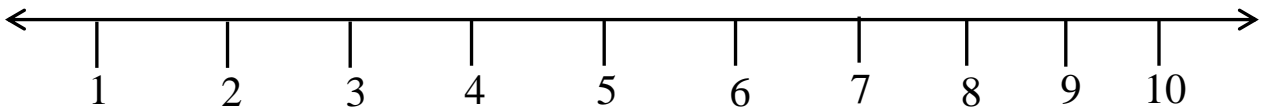
A.

1) What is 4 more than 6?



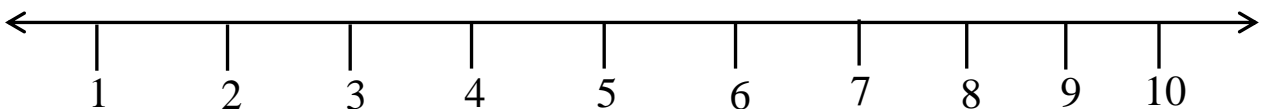
.....

2) What is 2 more than 5?



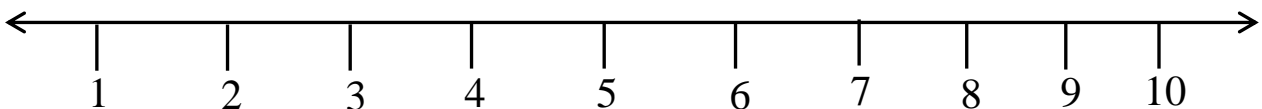
.....

3) What is 1 less than 8?



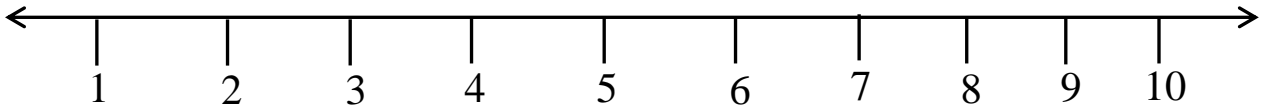
.....

4) What is 3 less than 7?



.....

5) What is 2 less than 10?



B. Add the following by first making 10s.

Example:

$$3 + 6 + 7$$

$$\underline{3 + 7 + 6}$$

$$\underline{10 + 6 = 16}$$

1) $4 + 6 + 3$

.....

.....

2) $1 + 5 + 9$

.....

.....

3) $8 + 5 + 5$

.....

.....

4) $9 + 3 + 7$

.....

.....

5) $2 + 6 + 8$

.....

.....